


Introduction: Picture Addition


INSTRUCTIONAL EXAMPLE - PROBLEM

BASIC ADDITION




 3 + 2 =

MISSING NUMBER
ADDITION



 2 + = 7


COMPLETE ADDITION



 + =


INSTRUCTIONAL EXAMPLE - ANSWER

BASIC ADDITION




 3 + 2 = 5

MISSING NUMBER
ADDITION



 2 + 5 = 7


COMPLETE ADDITION



 4 + 3 = 7


SKILLS PRACTICE - EXAMPLE

BASIC ADDITION




 1 + = 3

MISSING NUMBER
ADDITION



 5 + = 7


COMPLETE ADDITION



 + =


SKILLS PRACTICE - ANSWER

BASIC ADDITION



 1 + 2 = 3

MISSING NUMBER
ADDITION



 5 + 2 = 7


COMPLETE ADDITION




 3 + 1 = 4

Practice Problems:

A. 
 2 + 4 =

B. 
 4 + = 8

C. 
 + =