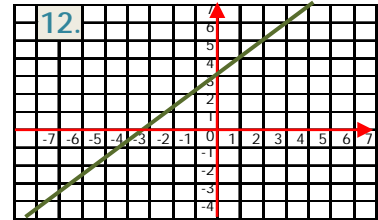
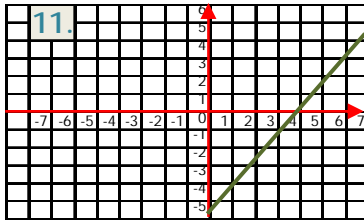
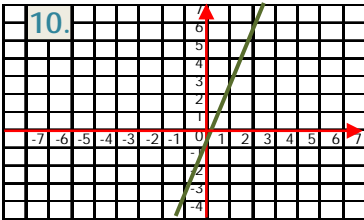
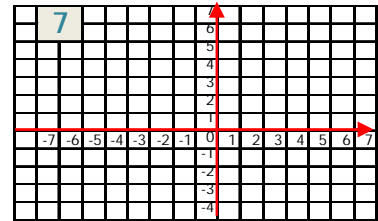
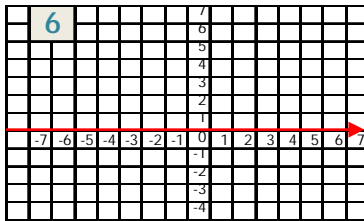
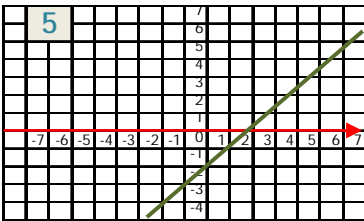


Quiz: Graphs & Equations of Lines

1. Find the slope of a line passing through the points (2, 7) and (7, 2)
2. Does the graph of straight line with slope of 5 and y- intercept of -3 pass through the point (5, 8)?
3. What is slope of the line $8x + 2y = 16$?
4. What is slope of a line passing through (-7, 3) and (8, 2)?

Write the equations for the following graphs.



Circle # Correct	0	1	2	3	4	5	6	7	8	9	10
Percentage Score	0%	10%	20%	30%	40%	50%	60%	70%	80%	90%	100%