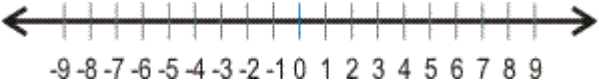
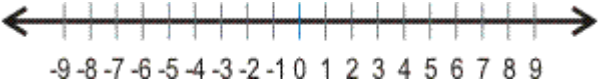
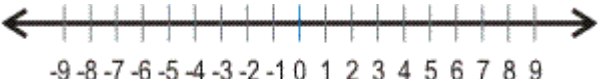





Quiz: Number Line Expressions

1. 	Represent $-8 - (-1)$ on a number line
2. 	Represent $-5 - (-7)$ on a number line
3. 	Represent $-9 + 5$ on a number line
4. 	Represent $-7 + 4$ on a number line
5. 	Represent $-1 + (-4)$ on a number line
6. 	Represent $-5 + (-4)$ on a number line
7. Find sum $-5 + (-6)$	8. Find $-19 + (-11)$
9. Find sum $-26 + (-34)$	10. Find $25 + (-50)$

Circle # Correct	0	1	2	3	4	5	6	7	8	9	10
Percentage Score	0%	10%	20%	30%	40%	50%	60%	70%	80%	90%	100%