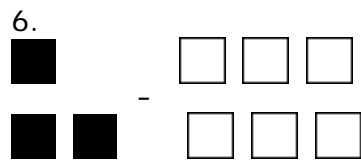
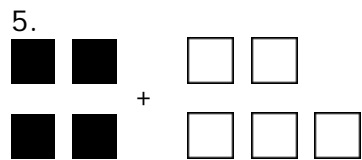
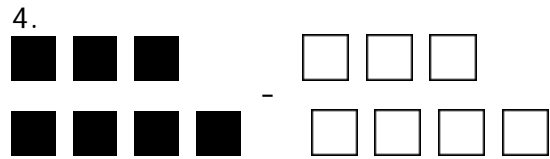
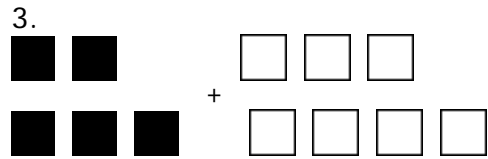
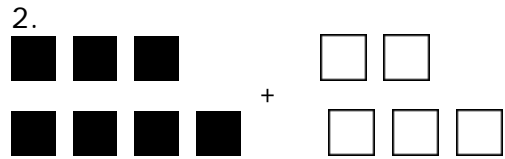



Quiz: Visual Expressions

Write the numerical expression for the models. Find the sum. Let one black tile equal +1 and one white tile equal -1.



7. Use a number line to solve the equation. $40 + (-3)$

8. What integer is represented by 11 positive tiles and 91 negative tiles?

9. Use a number line to solve the equation. $12 - (-12)$

10. What integer is represented by 50 positive tiles and 12 negative tiles?

Circle # Correct	0	1	2	3	4	5	6	7	8	9	10
Percentage Score	0%	10%	20%	30%	40%	50%	60%	70%	80%	90%	100%