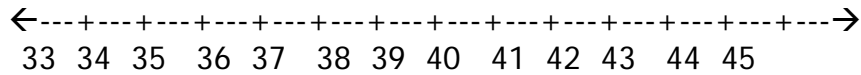


Independent Practice 2: Number Line

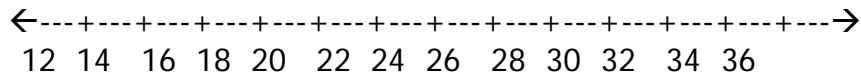


1) Use the number line to count forward from 36 to 44.

36, _____, _____, _____, _____, _____, _____, _____, _____

2) Use the number line to count backward from 38 to 33.

_____, _____, _____, _____, _____, _____

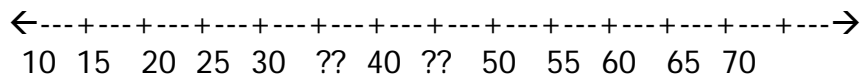


3) Use the number line to count forward from 14 to 24 by 2's.

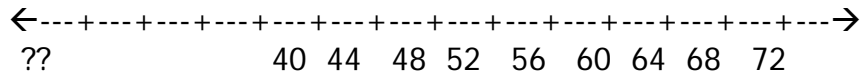
_____, _____, _____, _____, _____, _____

4) Use the number line to count backward from 32 to 20 by 2's.

_____, _____, _____, _____, _____, _____, _____



5) What are the two missing numbers in the number line? _____, _____



6) What is the missing number in the number line? _____