




Introduction: Which Weighs More or Less?




Intermediate Skills

Circle the image that weighs more.

 	<p>Visualize the picture and mark the option that weighs more in reality.</p>  <p>Answer:</p>
--	--



Intermediate Skills Practice

Circle the image that weighs less.

 	<p>Visualize the picture and mark the option that weighs more in reality.</p>  <p>Answer:</p>
---	--

Practice Problems

Circle the image that weighs less.

<p>A</p>		<p>B</p>	
----------	---	----------	---