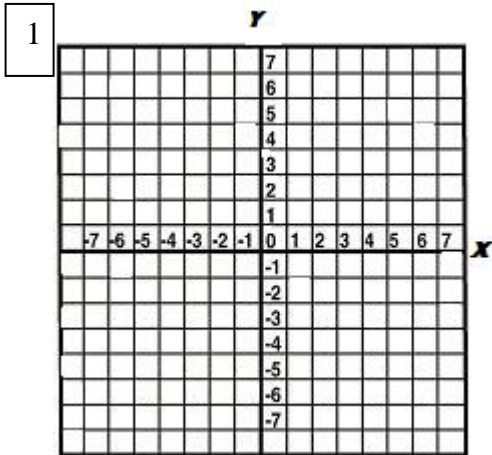
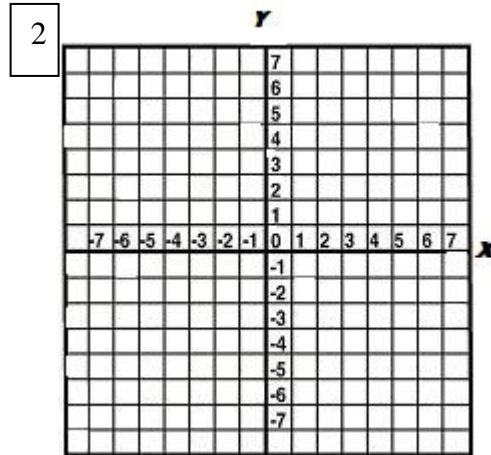


Independent Practice 2: Ordered Pairs

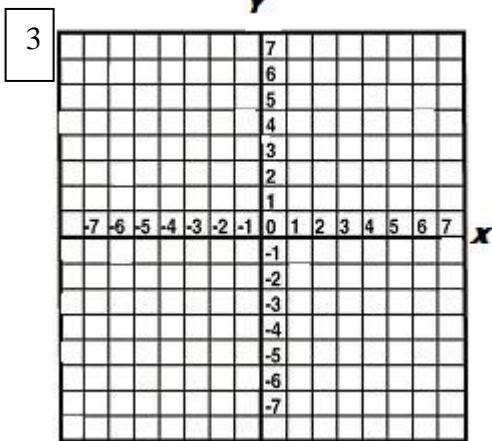
Draw the ordered points on the grid. Label each point.



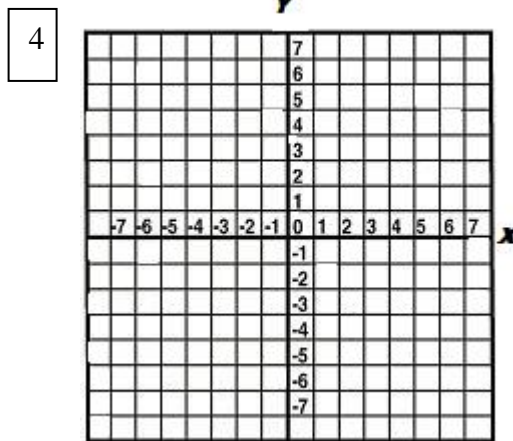
- A (5, 5)
- B (-4, 7)
- C (1, 2)
- D (7, -6)
- E (-2, -2)



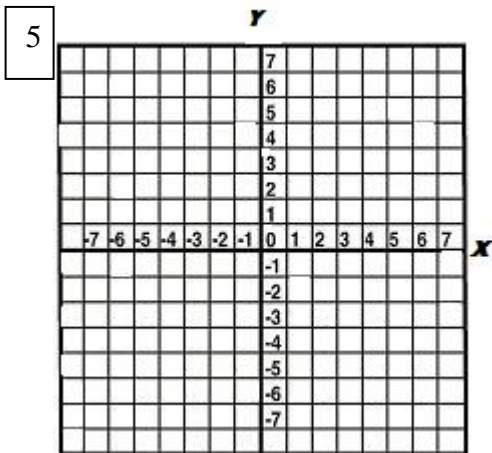
- A (3, -5)
- B (7, 5)
- C (6, 7)
- D (-3, 5)
- E (-7, 4)



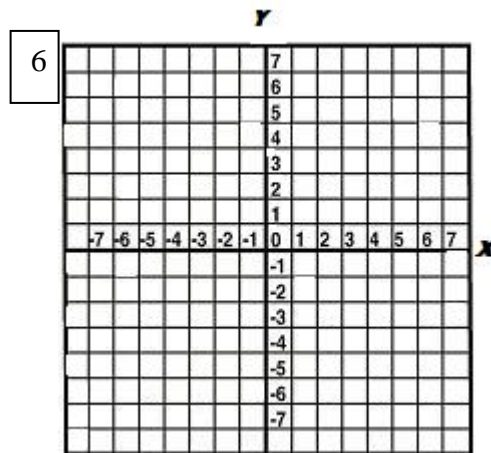
- A (0, 0)
- B (2, -6)
- C (7, -7)
- D (5, -6)
- E (-2, 4)



- A (-2, -4)
- B (3, 2)
- C (5, 2)
- D (-7, 2)
- E (-1, -2)



- A (-6, 0)
- B (0, 0)
- C (-5, 6)
- D (6, -5)
- E (5, -5)



- A (-6, 1)
- B (1, 0)
- C (-5, -2)
- D (-4, 4)
- E (0, -1)