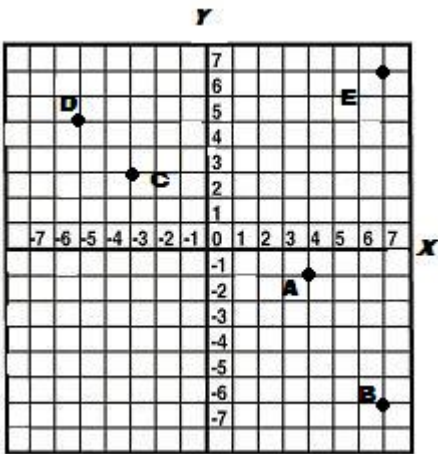
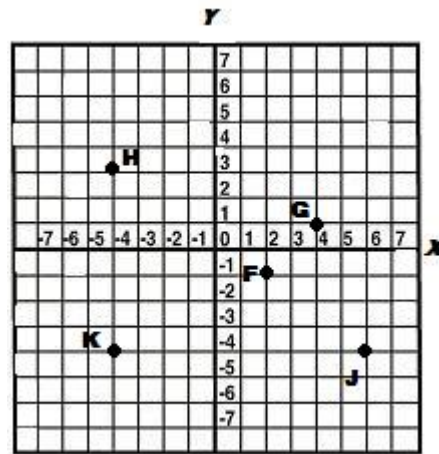


Independent Practice 2: Locate Ordered Pairs

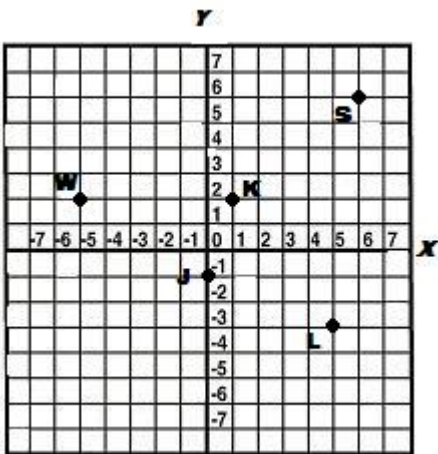
Find each ordered pair. Write the letter for the point named by the ordered pair.



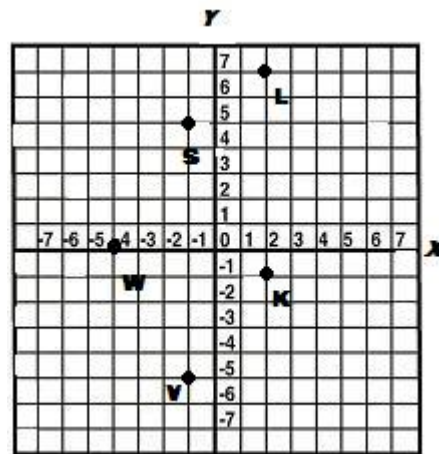
1. (7,7) \_\_\_\_\_
2. (7,-6) \_\_\_\_\_
3. (-5,5) \_\_\_\_\_
4. (4,-1) \_\_\_\_\_
5. (-3,3) \_\_\_\_\_



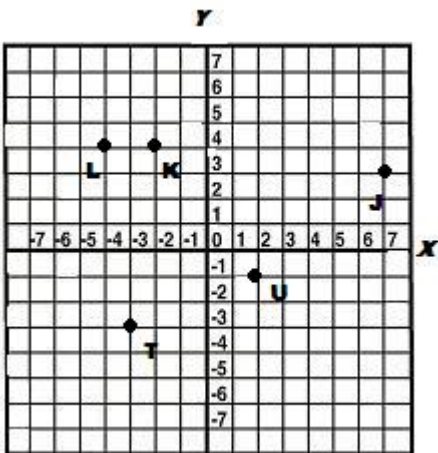
6. (4,1) \_\_\_\_\_
7. (2,-1) \_\_\_\_\_
8. (6,-4) \_\_\_\_\_
9. (-4,3) \_\_\_\_\_
10. (-4,-4) \_\_\_\_\_



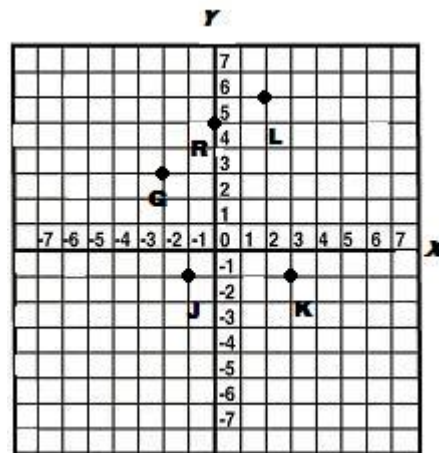
11. (6,6) \_\_\_\_\_
12. (5,-3) \_\_\_\_\_
13. (1,2) \_\_\_\_\_
14. (0,-1) \_\_\_\_\_
15. (-5,2) \_\_\_\_\_



16. (2,7) \_\_\_\_\_
17. (2,-1) \_\_\_\_\_
18. (-1,-5) \_\_\_\_\_
19. (-4,0) \_\_\_\_\_
20. (-1,5) \_\_\_\_\_



21. (-4,4) \_\_\_\_\_
22. (7,3) \_\_\_\_\_
23. (-3,-3) \_\_\_\_\_
24. (2,-1) \_\_\_\_\_
25. (-2,4) \_\_\_\_\_



26. (0,5) \_\_\_\_\_
27. (-2,3) \_\_\_\_\_
28. (3,-1) \_\_\_\_\_
29. (-1,-1) \_\_\_\_\_
30. (2,6) \_\_\_\_\_