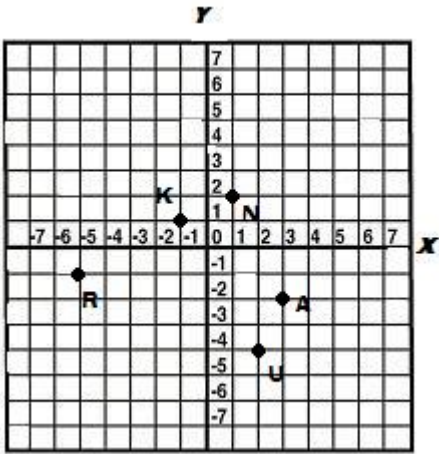


Independent Practice 2: Quadrants

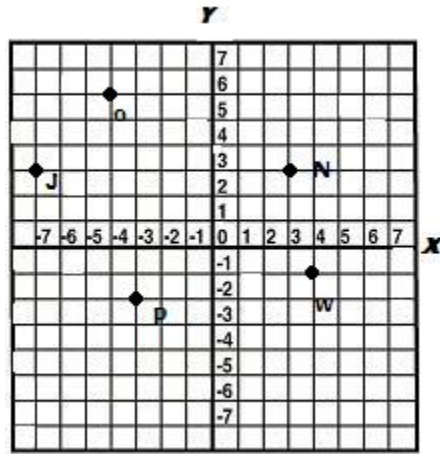
Name the quadrant or on which axis the point lies.

1



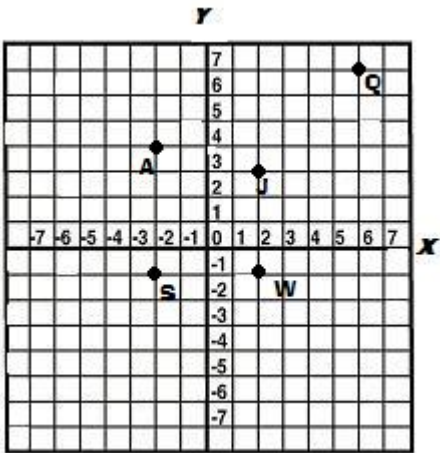
A _____
 U _____
 N _____
 K _____
 R _____

2



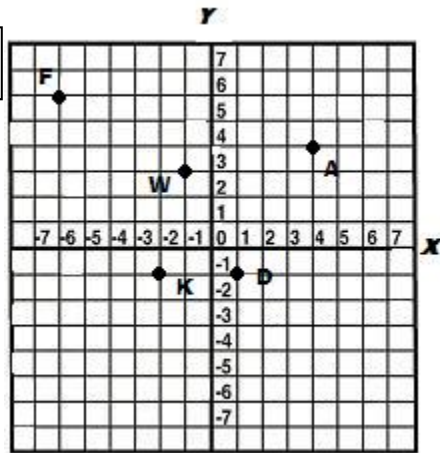
W _____
 N _____
 P _____
 O _____
 J _____

3



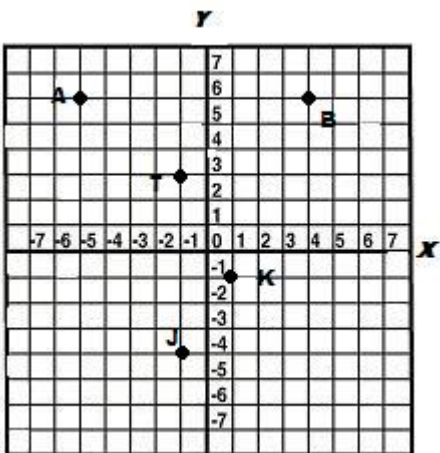
J _____
 S _____
 Q _____
 A _____
 W _____

4



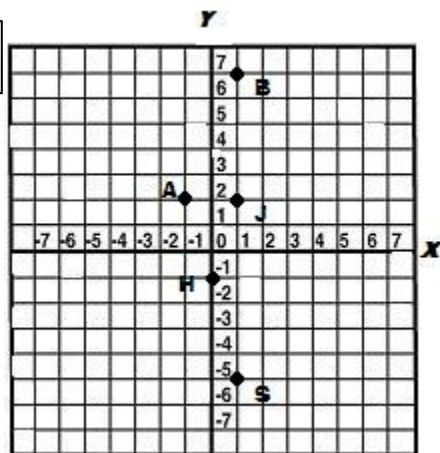
F _____
 W _____
 A _____
 K _____
 D _____

5



J _____
 K _____
 B _____
 A _____
 T _____

6



J _____
 H _____
 A _____
 B _____
 S _____