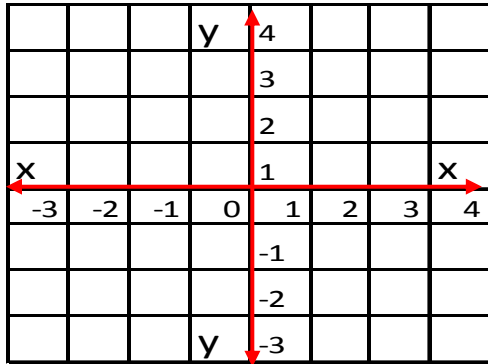
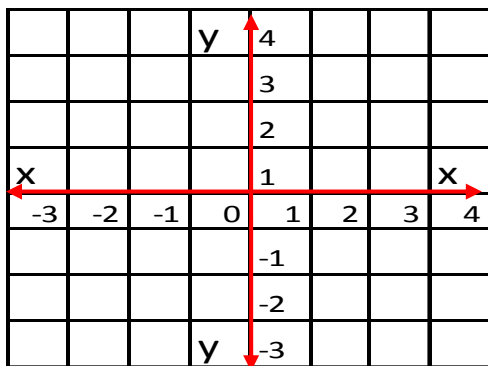


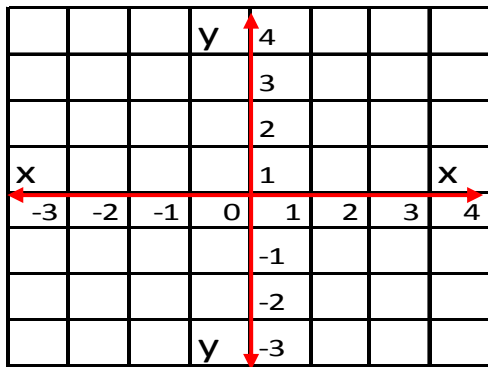
Independent Practice 1: Plot the Ordered Pairs
 Plot 5 ordered pairs on each graph.



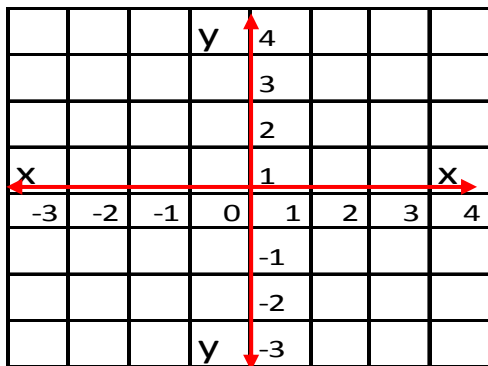
1. $(0, 3)$
2. $(-1, 2)$
3. $(-3, 4)$
4. $(-2, 3)$
5. $(2, -2)$



6. $(3, -3)$
7. $(4, -3)$
8. $(1, 2)$
9. $(0, -3)$
10. $(-2, 0)$



11. $(-1, 1)$
12. $(2, -1)$
13. $(-3, 3)$
14. $(-1, 4)$
15. $(-1, 3)$



16. $(-2, -1)$
17. $(3, -2)$
18. $(2, 3)$
19. $(1, 4)$
20. $(0, -1)$