
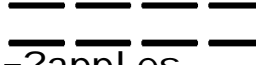



Quiz: Estimate Length Problems


Directions: Solve the length problems using pictures.

One apple is the length of one string. One lime is the length of two strings.


1. 
=?strings


2. 
=?apples

3. 
=?strings

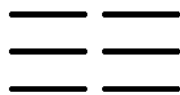
4. 
=?limes


5. 
=?apples

6. 
=?strings

7. 
=?limes

8. 
=?strings

9. 
=?apples

10. 
=?strings

Circle # Correct	0	1	2	3	4	5	6	7	8	9	10
Percentage Score	0%	10%	20%	30%	40%	50%	60%	70%	80%	90%	100%