

Name \_\_\_\_\_ Date \_\_\_\_\_

Quiz: Estimate on a Number Line

Directions: Estimate what number is selected on the number line.

1.



2.



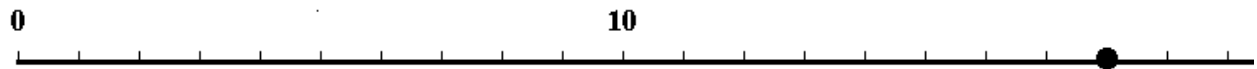
3.



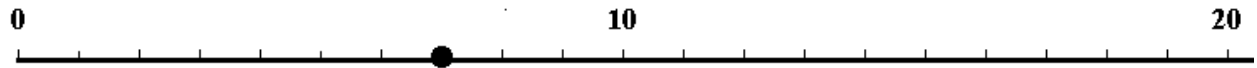
4.



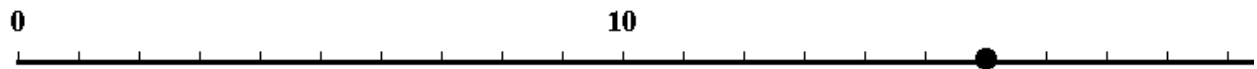
5.



6.



7.



Circle # Correct	0	1	2	3	4	5	6	7	8	9	10
Percentage Score	0%	10%	20%	30%	40%	50%	60%	70%	80%	90%	100%