


### Independent Practice 2: Estimate the Number of Objects

Directions: Guess how many objects there are and then check by counting.

1.



2.



3.




4.



5.



6.



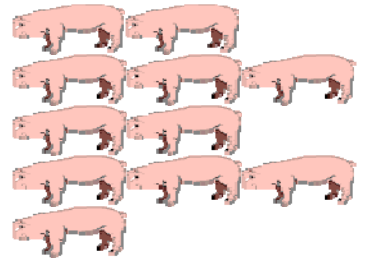
7.




8.



9.



10.



11.



12.

