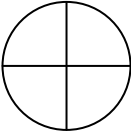
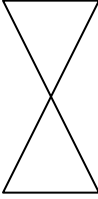
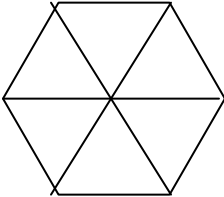
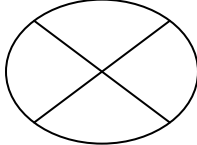

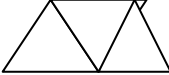






Name: _____ Date: _____

Independent Practice 2: Color the picture to show the fraction

<p>1.  $\frac{3}{4}$</p>	<p>2.  $\frac{1}{2}$</p>
<p>3.  $\frac{5}{6}$</p>	<p>4.  $\frac{1}{4}$</p>
<p>5.  $\frac{2}{6}$</p>	<p>6. $\frac{2}{3}$ </p>
<p>7.  $\frac{3}{5}$ = _____ part of _____ or _____</p>	<p>8.  $\frac{2}{4}$ = _____ part of _____ or _____</p>
<p>9.  _____ = _____ part of _____ or _____</p>	<p>10.  _____ = _____ part of _____ or _____</p>