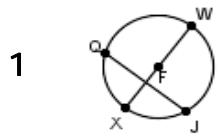
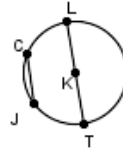


Quiz: Circle – Diameter, Chord, Center, and Radius

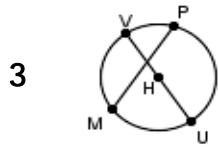
Write name of the designated coordinates (*diameter*, *chord*, *center*, or *radius*).



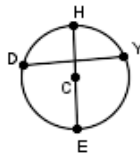
F _____



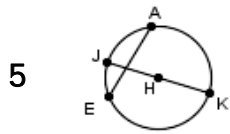
KT _____



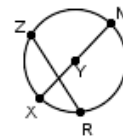
MP _____



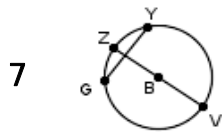
C _____



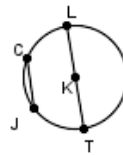
HK _____



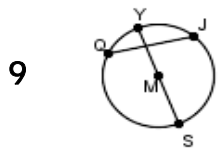
XN _____



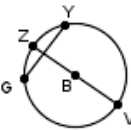
BV _____



KT _____



QJ _____



B _____

Circle # Correct	0	1	2	3	4	5	6	7	8	9	10
Percentage Score	0%	10%	20%	30%	40%	50%	60%	70%	80%	90%	100%