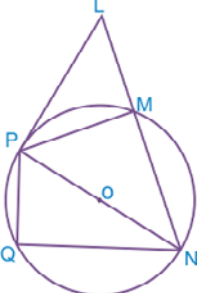
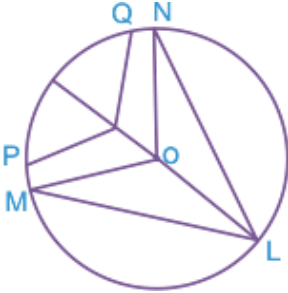
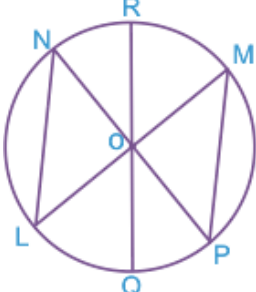
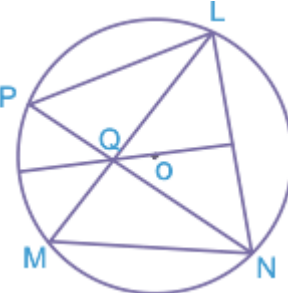


Quiz: Circle Proofs

Answer the following questions dealing with circle proofs.

1		<p>Given : Tangent LP Diameter NP Secant LN</p> <p>Prove : $\Delta LPN \sim \Delta PMN$</p>
2		<p>Given : Chord LP \cong Chord NP</p> <p>Prove : $\Delta LPN \cong \Delta PMN$</p>
3		<p>Given : Diameter LM, NP</p> <p>Prove : Arc LN \cong Arc MP</p>
4		<p>Given : Chords LM, NP, LP, NM</p> <p>Prove : $LQ * QM = NQ * QP$</p>

Circle # correct	0	1	2	3	4	5	6	7	8	9	10
Percentage Score	0%	10%	20%	30%	40%	50%	60%	70%	80%	90%	100%