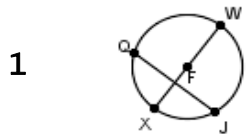
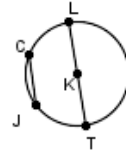


Quiz: Find the circumference of a circle

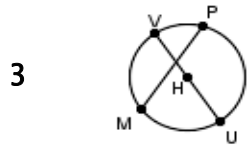
Find the circumference of given circles. (Use  $\pi$  as 3.14)



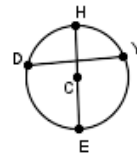
FW=2.1 \_\_\_\_\_ 2



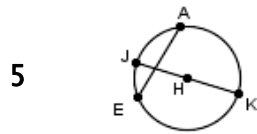
KT=7.2 \_\_\_\_\_



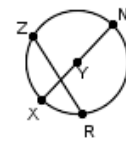
HU=4.7 \_\_\_\_\_ 4



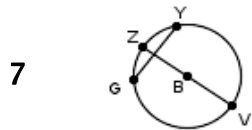
CE=2.5 \_\_\_\_\_



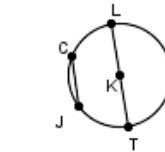
HJ=4.6 \_\_\_\_\_ 6



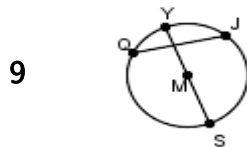
XY=4.2 \_\_\_\_\_



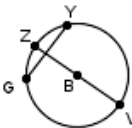
BZ=2.5 \_\_\_\_\_ 8



KT=5.8 \_\_\_\_\_



MS=4.2 \_\_\_\_\_ 10



BV=1.9 \_\_\_\_\_

circle # correct	0	1	2	3	4	5	6	7	8	9	10
Percentage Score	0%	10%	20%	30%	40%	50%	60%	70%	80%	90%	100%