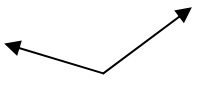
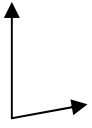
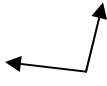

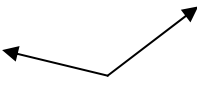
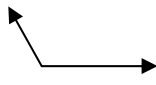
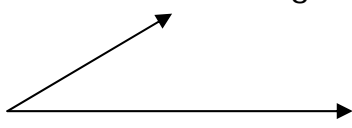

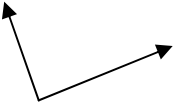
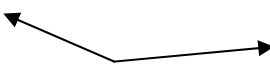


Name \_\_\_\_\_ Date \_\_\_\_\_

Quiz: Classify and Measure Angles

Use a protractor to measure each angle.

1. Measure = ____ Degrees 	2. Measure = ____ Degrees 
3. Measure = ____ Degrees 	4. Measure = ____ Degrees 
5. Measure = ____ Degrees 	6. Measure = ____ Degrees 
7. Measure = ____ Degrees 	8. Measure = ____ Degrees 
9. Measure = ____ Degrees 	10. Measure = ____ Degrees 

Circle # Correct	0	1	2	3	4	5	6	7	8	9	10
Percentage Score	0%	10%	20%	30%	40%	50%	60%	70%	80%	90%	100%