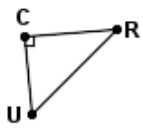
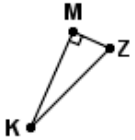
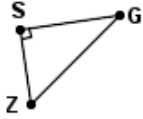
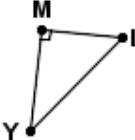
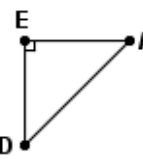
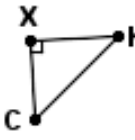
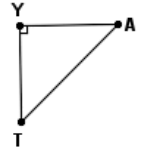
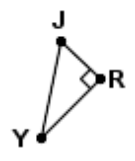
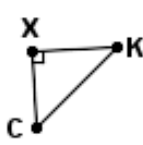
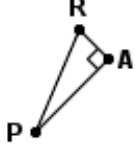


Quiz: Find the cosine of one point.

1		2		Find cos Z. $KM = 2.7$ $ZM = 1.3$ $KZ = 3.8$
3		4		Find cos Y. $YM = 1.63$ $ML = 1.4$ $YL = 3$
5		6		Find cos C. $CK = 8.02$ $XC = 4.8$ $XK = 5.8$
7		8		Find cos Y. $YR = 4.2$ $JR = 4.8$ $YJ = 6.8$
9		10		Find cos P. $PR = 8.7$ $AR = 1.9$ $AP = 5.6$

Circle # Correct	0	1	2	3	4	5	6	7	8	9	10
Percentage Score	0%	10%	20%	30%	40%	50%	60%	70%	80%	90%	100%