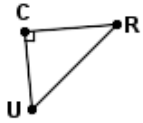
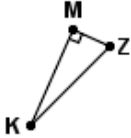
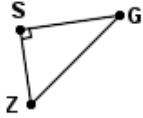
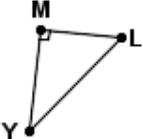
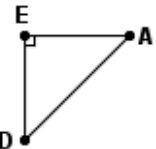
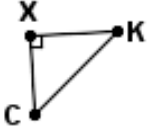
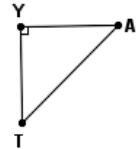
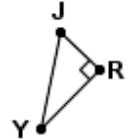
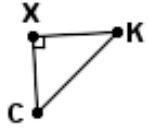
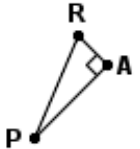


Quiz: Find the tangent of one point

1		Find $\tan R$. $CR=5.3$ $UC=3.1$ $RU=7.6$	2		Find $\tan Z$. $KM=1.6$ $ZM=1.3$ $KZ=3.8$
3		Find $\tan Z$. $SG=7.7$ $SZ=6.8$ $GZ=9$	4		Find $\tan Y$. $YM=1.63$ $ML=1.4$ $YL=3$
5		Find $\tan D$. $DE=7.8$ $EA=3.7$ $DA=8.4$	6		Find $\tan C$. $CK=8.02$ $XC=4.8$ $XK=5.8$
7		Find $\tan A$. $TY=7.2$ $TA=9.2$ $YA=6.2$	8		Find $\tan Y$. $YR=4.2$ $JR=4.8$ $YJ=6.8$
9		Find $\tan C$. $CK=5.1$ $XC=2.7$ $XK=4.9$	10		Find $\tan P$. $PR=8.7$ $AR=1.9$ $AP=5.6$

Circle # Correct	0	1	2	3	4	5	6	7	8	9	10
Percentage Score	0%	10%	20%	30%	40%	50%	60%	70%	80%	90%	100%