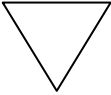
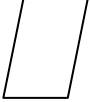




Quiz: Classify and Identify Polygons

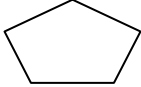

Answer the questions and identify the polygons.

1 How many sides are there in a triangle? _____ 2 How many angles are there in a pentagon? _____

3 How many angles are there in Quadrilateral _____ 4 How many angles are there in Octagon? _____

5  _____ 6  _____

7  _____ 8  _____

9  _____ 10  _____

Circle # Correct	0	1	2	3	4	5	6	7	8	9	10
Percentage Score	0%	10%	20%	30%	40%	50%	60%	70%	80%	90%	100%