







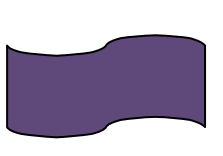


Quiz: Line Symmetry

Classify horizontal and vertical line symmetry (Check the Box "☐")

1		Horizontal <input type="checkbox"/> Vertical <input type="checkbox"/> Both <input type="checkbox"/> None <input type="checkbox"/>	2		Horizontal <input type="checkbox"/> Vertical <input type="checkbox"/> Both <input type="checkbox"/> None <input type="checkbox"/>
3		Horizontal <input type="checkbox"/> Vertical <input type="checkbox"/> Both <input type="checkbox"/> None <input type="checkbox"/>	4		Horizontal <input type="checkbox"/> Vertical <input type="checkbox"/> Both <input type="checkbox"/> None <input type="checkbox"/>
5	Which single digit number would have Horizontal line symmetry if 0-9 numbers are printed on a sheet?		6		Horizontal <input type="checkbox"/> Vertical <input type="checkbox"/> Both <input type="checkbox"/> None <input type="checkbox"/>
7		Horizontal <input type="checkbox"/> Vertical <input type="checkbox"/> Both <input type="checkbox"/> None <input type="checkbox"/>	8		Horizontal <input type="checkbox"/> Vertical <input type="checkbox"/> Both <input type="checkbox"/> None <input type="checkbox"/>
9		Horizontal <input type="checkbox"/> Vertical <input type="checkbox"/> Both <input type="checkbox"/> None <input type="checkbox"/>	10		Horizontal <input type="checkbox"/> Vertical <input type="checkbox"/> Both <input type="checkbox"/> None <input type="checkbox"/>

Circle # Correct	0	1	2	3	4	5	6	7	8	9	10
Percentage Score	0%	10%	20%	30%	40%	50%	60%	70%	80%	90%	100%