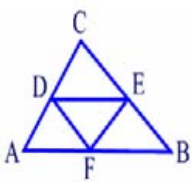
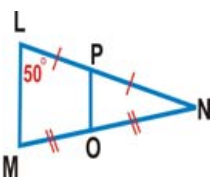
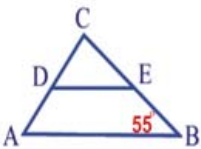



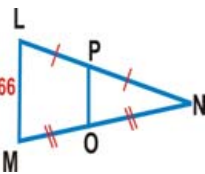
Quiz: Mid-Segment of a Triangle

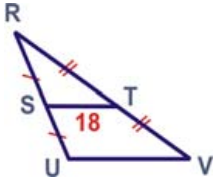
1.  Given  $AC = 26$ ,  $CB = 10$ ,  $AB = 26$ . D, E & F are midpoints. Find the perimeter of  $\triangle DEF$ .


2.  Find the measure of  $\angle NPO$ .

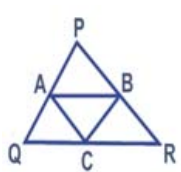
3.  Find the measure of  $\angle CED$ .

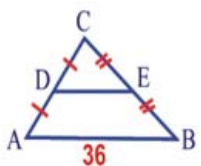
4.  Find DE.

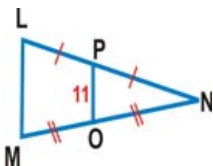
5.  Find PO.

6.  Find UV.

7.  Find the measure of  $\angle CED$ .

8.  Given  $AC = 6$ ,  $CB = 5$ ,  $AB = 9$ . A, B & C are midpoints. Find the perimeter of  $\triangle PQR$ .

9.  Find DE.

10.  Find LM.

Circle # Correct	0	1	2	3	4	5	6	7	8	9	10
Percentage Score	0%	10%	20%	30%	40%	50%	60%	70%	80%	90%	100%