

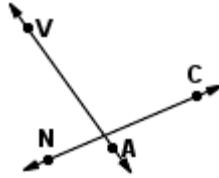
Quiz: Parallel, Intersecting, and Perpendicular Lines

Classify each pair of lines as parallel, intersecting, or perpendicular lines.

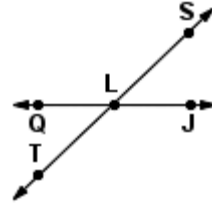
1.



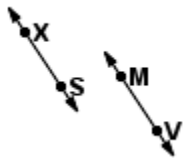
2.



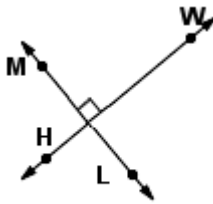
3.



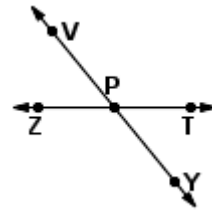
4.



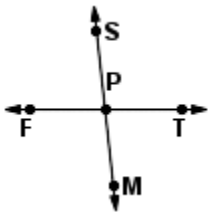
5.



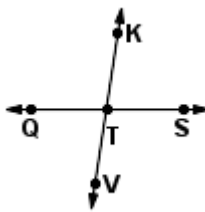
6.



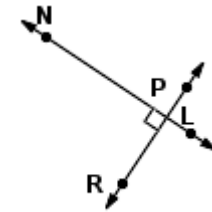
7.



8.



9.



Circle # Correct	0	1	2	3	4	5	6	7	8	9	10
Percentage Score	0%	10%	20%	30%	40%	50%	60%	70%	80%	90%	100%