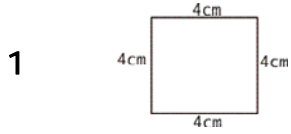
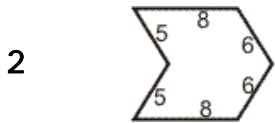



Quiz: Perimeter and Circumference



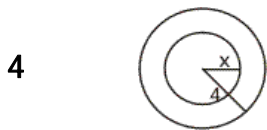
Find the perimeter of the given square.



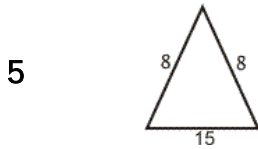
Find the perimeter of the given figure.



Find the width of a rectangular garden if its perimeter is 48 m and its length is 16 m.



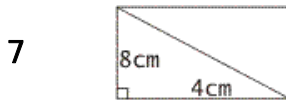
Find the value of x , if the perimeter of both circles is 44 cm.



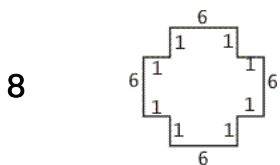
Find the perimeter of the given triangle.



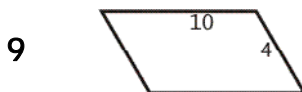
The radius of a circle measures 14 m. What is the circumference of the circle?




Find the perimeter of the rectangle.



Find the perimeter of the given figure.



Find the perimeter of the given parallelogram.



Find the value of x . The perimeter of the rectangular field is 72 ft.

Circle # Correct	0	1	2	3	4	5	6	7	8	9	10
Percentage Score	0%	10%	20%	30%	40%	50%	60%	70%	80%	90%	100%