










Quiz: Point Symmetry

Indicate whether each has point symmetry.

1		Yes <input type="checkbox"/> No <input type="checkbox"/>	2		Yes <input type="checkbox"/> No <input type="checkbox"/>
3		Yes <input type="checkbox"/> No <input type="checkbox"/>	4		Yes <input type="checkbox"/> No <input type="checkbox"/>
5	Does the word WOW possess point symmetry? Yes <input type="checkbox"/> No <input type="checkbox"/>		6		Yes <input type="checkbox"/> No <input type="checkbox"/>
7		Yes <input type="checkbox"/> No <input type="checkbox"/>	8		Yes <input type="checkbox"/> No <input type="checkbox"/>
9		Yes <input type="checkbox"/> No <input type="checkbox"/>	10		Yes <input type="checkbox"/> No <input type="checkbox"/>

Circle # Correct	0	1	2	3	4	5	6	7	8	9	10
Percentage Score	0%	10%	20%	30%	40%	50%	60%	70%	80%	90%	100%