
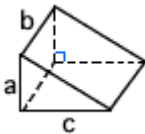
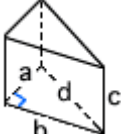
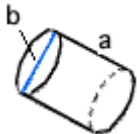

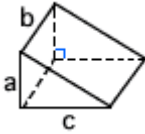
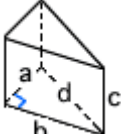
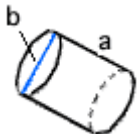

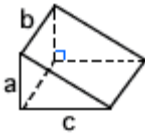


Quiz: Surface Area and Volume of Solids and Cylinders

1		$a = 2\text{km}$ $b = 10\text{km}$	_____	2		$a = 2.2$ $b = 6.2\text{m}$ $c = 12\text{m}$	_____
3		$a = 6$ $b = 12$ $c = 15$ $d = 10$	_____	4		$a = 4\text{km}$ $b = 16\text{km}$	_____
5		$a = 3\text{km}$ $b = 19\text{km}$	_____	6		$a = 3.3\text{m}$ $b = 6.2\text{m}$ $c = 8\text{m}$	_____
7		$a = 3$ $b = 9$ $c = 13$ $d = 14$	_____	8		$a = 6\text{km}$ $b = 17\text{km}$	_____
9		$a = 6\text{km}$ $b = 24\text{km}$	_____	10		$a = 5.1\text{m}$ $b = 3\text{m}$ $c = 25\text{m}$	_____

Circle # Correct	0	1	2	3	4	5	6	7	8	9	10
Percentage Score	0%	10%	20%	30%	40%	50%	60%	70%	80%	90%	100%