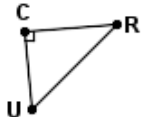
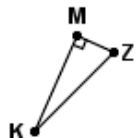


Quiz: Tangent: Find the value of x

Find the value of x using the tangent of the given angle.

1  $\angle R = 14.3^\circ$
 $CR = 4.4$
 $UC = x$

2  $\angle K = 19.36^\circ$
 $KM = x$
 $ZM = 1.4$

3  $\angle Z = 17.65^\circ$
 $SG = 7.7$
 $SZ = x$

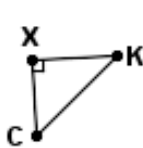
4  $\angle Y = 63.63^\circ$
 $YM = 3.83$
 $ML = x$

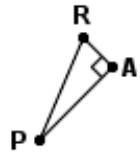
5  $\angle A = 54.19^\circ$
 $DE = 6.9$
 $EA = x$

6  $\angle C = 65.45^\circ$
 $XC = x$
 $XK = 6.1$

7  $\angle T = 35.55^\circ$
 $TY = 1.9$
 $YA = x$

8  $\angle J = 45.69^\circ$
 $YR = x$
 $JR = 3.5$

9  $\angle C = 59.55^\circ$
 $XC = x$
 $XK = 4.9$

10  $\angle R = 41.21^\circ$
 $AR = 1.6$
 $AP = x$

Circle # Correct	0	1	2	3	4	5	6	7	8	9	10
Percentage Score	0%	10%	20%	30%	40%	50%	60%	70%	80%	90%	100%