


Quiz: Transformations - Rotation



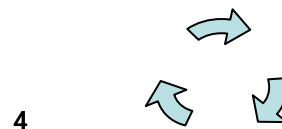
What is measure of the angle between blades of windmill?



A circular gate is divided into 3 parts. What is measure of each angle?



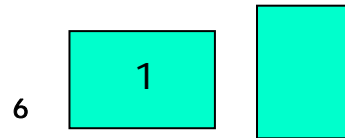
Is the rotation clockwise?



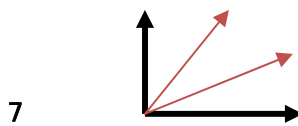
Is the rotation clockwise?



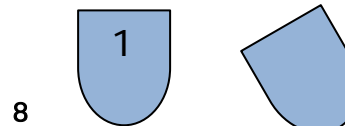
Is the rotation anticlockwise?




At what angle is the figure-1 rotated?



What is measure of each angle?



At what angle is the figure-1 rotated?



Is the rotation counter-clockwise?



What is the measure of the angle of the tool with baseline?

Circle # Correct	0	1	2	3	4	5	6	7	8	9	10
Percentage Score	0%	10%	20%	30%	40%	50%	60%	70%	80%	90%	100%