
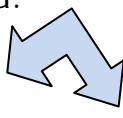
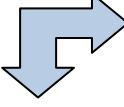



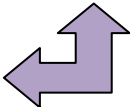






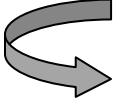








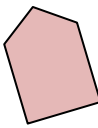
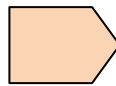



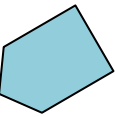

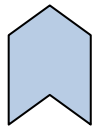
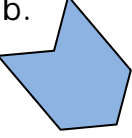


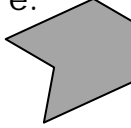













Quiz: Transformations - Working with Translations

Which of following figures are translations of the shape in the first column?

1		a. 	b. 	c. 	d. 	e. 	f. 
2		a. 	b. 	c. 	d. 	e. 	f. 
3		a. 	b. 	c. 	d. 	e. 	f. 
4		a. 	b. 	c. 	d. 	e. 	f. 
5		a. 	b. 	c. 	d. 	e. 	f. 
6			Describe the translation – horizontal / Vertical of the diagram?				
7			Describe the translation – horizontal / Vertical of the diagram?				
8			Describe the translation – horizontal / Vertical of the diagram?				
9			Describe the translation – horizontal / Vertical of the diagram?				
10			Describe the translation – horizontal / Vertical of the diagram?				

Circle # Correct	0	1	2	3	4	5	6	7	8	9	10
Percentage Score	0%	10%	20%	30%	40%	50%	60%	70%	80%	90%	100%