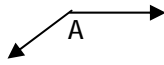


### Independent Practice 2: Classifying and Measuring Angles

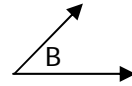
Classify the angles as straight, right, acute, obtuse, or reflex.

1.



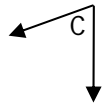
$\angle A$  \_\_\_\_\_

2.



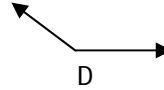
$\angle B$  \_\_\_\_\_

3.



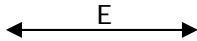
$\angle C$  \_\_\_\_\_

4.



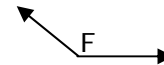
$\angle D$  \_\_\_\_\_

5.



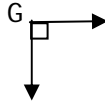
$\angle E$  \_\_\_\_\_

6.



$\angle F$  \_\_\_\_\_

7.



$\angle G$  \_\_\_\_\_

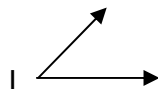
8.



$\angle H$  \_\_\_\_\_

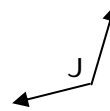
Measure the angles.

9.



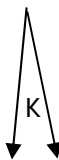
$\angle I$  \_\_\_\_\_

10.



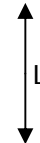
$\angle J$  \_\_\_\_\_

11.



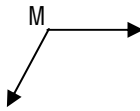
$\angle K$  \_\_\_\_\_

12.



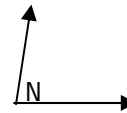
$\angle L$  \_\_\_\_\_

13.



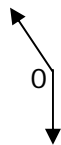
$\angle M$  \_\_\_\_\_

14.



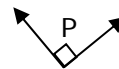
$\angle N$  \_\_\_\_\_

15.



$\angle O$  \_\_\_\_\_

16.



$\angle P$  \_\_\_\_\_