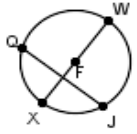
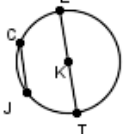
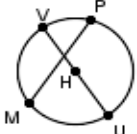
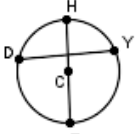
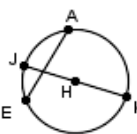
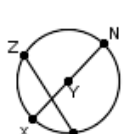
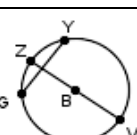
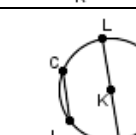
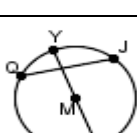
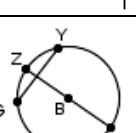


Quiz: Area of a Circle

Find the area of the given circles. (Use  $\pi$  as 3.14)

1		FW=2.1	_____	2		KT=7.2	_____
3		HU=4.7	_____	4		CE=2.5	_____
5		HJ=4.6	_____	6		XY=4.2	_____
7		BZ=2.5	_____	8		KT=5.8	_____
9		MS=4.2	_____	10		BV=1.9	_____

Circle # correct	0	1	2	3	4	5	6	7	8	9	10
Percentage score	0%	10%	20%	30%	40%	50%	60%	70%	80%	90%	100%