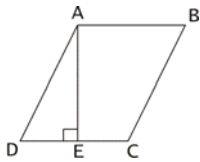
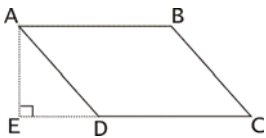
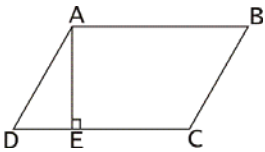
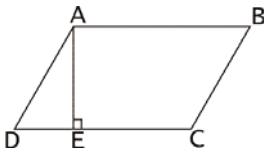


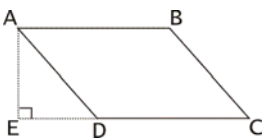
Quiz: Area of a Parallelogram

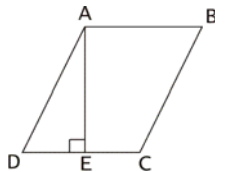
1  DC=34cm  
AE=22cm \_\_\_\_\_

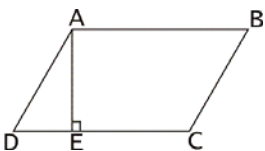
2  DC=19cm  
AE=5cm \_\_\_\_\_

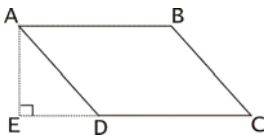
3  DC=42cm  
AE=9cm \_\_\_\_\_

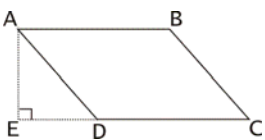
4  DC=31cm  
AE=10cm \_\_\_\_\_

5  DC=21cm  
AE=17cm \_\_\_\_\_

6  DC=15cm  
AE=3cm \_\_\_\_\_

7  DC=28cm  
AE=7cm \_\_\_\_\_

8  DC=26cm  
AE=5cm \_\_\_\_\_

9  DC=43cm  
AE=8cm \_\_\_\_\_

10  DC=38cm  
AE=9cm \_\_\_\_\_

Circle # Correct	0	1	2	3	4	5	6	7	8	9	10
Percentage Score	0%	10%	20%	30%	40%	50%	60%	70%	80%	90%	100%