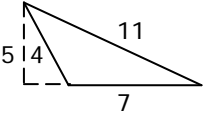
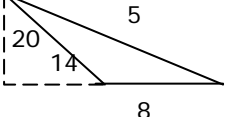
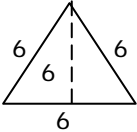
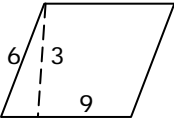
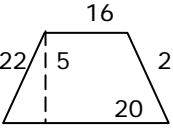
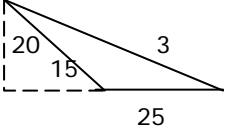
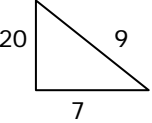
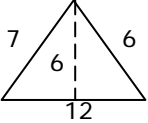
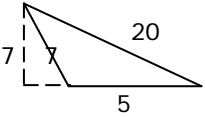
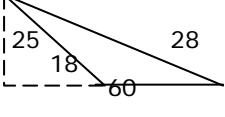


Independent Practice 2: Area and Perimeter of Triangles, Parallelograms, and Trapezoids

Determine the area and perimeter of the triangles, parallelograms, and trapezoids.

1		<p>Area : Perimeter:</p>	2		<p>Area : Perimeter:</p>
3		<p>Area : Perimeter:</p>	4		<p>Area : Perimeter:</p>
5		<p>Area : Perimeter:</p>	6		<p>Area : Perimeter:</p>
7		<p>Area : Perimeter:</p>	8		<p>Area : Perimeter:</p>
9		<p>Area : Perimeter:</p>	10		<p>Area : Perimeter:</p>