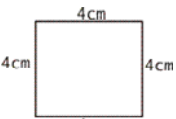
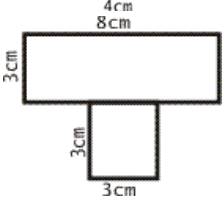

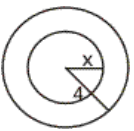


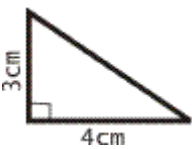
Quiz: Area of Polygons and Circles

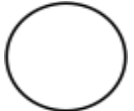
1  Find the area of the square. _____

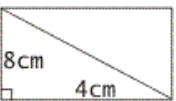
2  Find the area of the given figure. _____

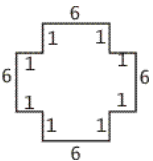
3  Find the width of a rectangular garden if its area is 63 m^2 and its length is 9 m . _____

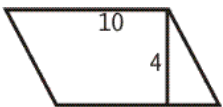
4  Find the value of x , if the area of both circles is $25 \pi \text{ cm}^2$. _____


5  Find out the area of given triangle. _____

6  The radius of a circle measures 2 m . What is the area of the circle? _____

7  Find the area of the rectangle. _____

8  Find the area of the given figure. _____

9  Find the area of the given parallelogram. _____

10  Find the value of x . area of a rectangular field showing in figure is 128 ft^2 . _____

Circle # correct	0	1	2	3	4	5	6	7	8	9	10
Percentage score	0%	10%	20%	30%	40%	50%	60%	70%	80%	90%	100%