

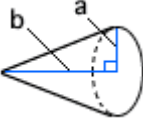
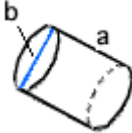
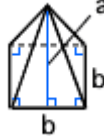
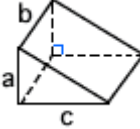

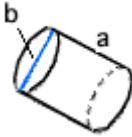

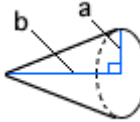


Quiz: Prisms, Pyramids, Cylinders, Cones, and Spheres

Find the volume of the following figures.

1		$a = 5\text{km}$ $b = 10\text{km}$	_____	2		$a = 9\text{mm}$	_____
3		$a = 8\text{m}$ $b = 11\text{m}$	_____	4		$a = 4\text{km}$ $b = 14\text{km}$	_____
5		$a = 1\text{km}$ $b = 4\text{km}$	_____	6		$a = 3\text{m}$ $b = 7\text{m}$ $c = 9\text{m}$	_____

Find the surface area of the following figures.

7		$a = 2.1\text{m}$	_____	8		$a = 7\text{km}$ $b = 18\text{km}$	_____
9		$a = 5\text{km}$ $b = 22\text{km}$	_____	10		$a = 9\text{m}$ $b = 18\text{m}$	_____

Circle # Correct	0	1	2	3	4	5	6	7	8	9	10
Percentage Score	0%	10%	20%	30%	40%	50%	60%	70%	80%	90%	100%