

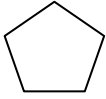
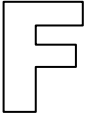


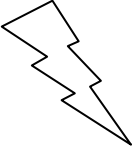
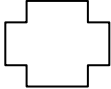






Independent Practice 2: Recognizing Lines of Symmetry

| | |
|--|--|
| <p>1. Does the figure have a line of symmetry?</p>  <p>Yes ___ No ___</p> | <p>2. 1) How many lines of symmetry does the figure have? ___</p>  <p>2) Draw them on the figure.</p> |
| <p>3. 1) How many lines of symmetry does a pentagon have? ___</p>  <p>2) Draw them on the pentagon.</p> | <p>4. Does the figure have a line of symmetry?</p>  <p>Yes ___ No ___</p> |
| <p>5. Does the figure have a line of symmetry?</p>  <p>Yes ___ No ___</p> | <p>6. 1) How many lines of symmetry does the figure have? ___</p>  <p>2) Draw them on the figure.</p> |
| <p>7. Does the figure have a line of symmetry?</p>  <p>Yes ___ No ___</p> | <p>8. 1) How many lines of symmetry does the figure have? ___</p>  <p>2) Draw them on the figure.</p> |
| <p>9. 1) How many lines of symmetry does the triangle have? ___</p>  <p>2) Draw them on the triangle.</p> | <p>10. Does the figure have a line of symmetry?</p>  <p>Yes ___ No ___</p> |
| <p>11. 1) How many lines of symmetry does the figure have? ___</p>  <p>2) Draw them on the figure.</p> | <p>12. Does the figure have a line of symmetry?</p>  <p>Yes ___ No ___</p> |