





Name _____ Date _____

Homework: Reading Picture Graph

Read the picture graph and answer the questions:

Basketball Picture Graph

Michael	
Chat	
Joe	

Each  = 1 basketball

1. There is total of _____ basketballs.
2. Joe has _____ basketballs more than Michael.
3. Chat has _____ basketballs.
4. Who has more basketballs? Chet or Joe?
