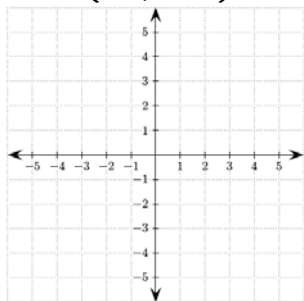


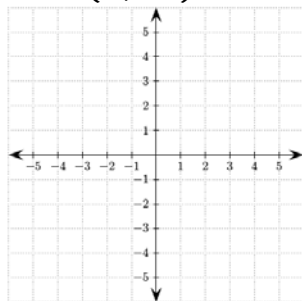
Independent Practice 2: Plotting Points

Plot each point.

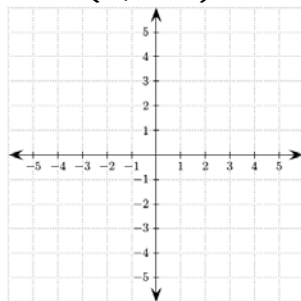
1. $(-1, -2)$



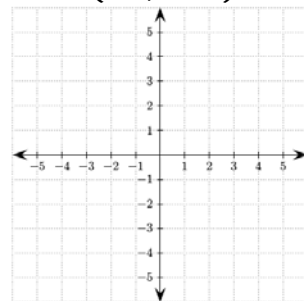
2. $(5, 2)$



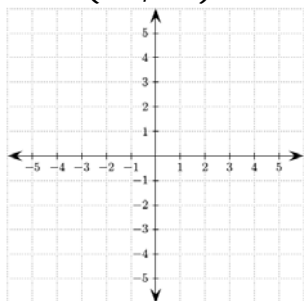
3. $(4, -3)$



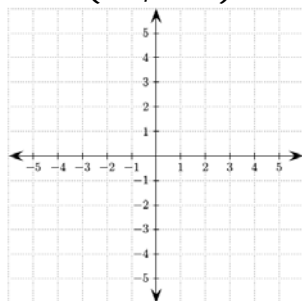
4. $(-3, -2)$



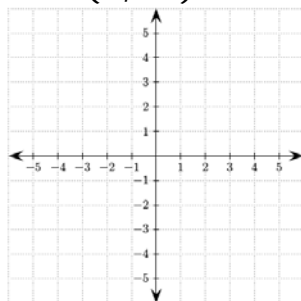
5. $(-1, 5)$



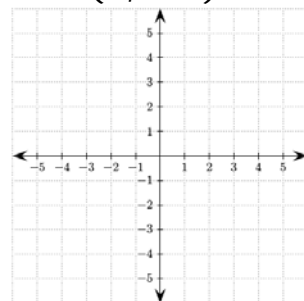
6. $(-2, -4)$



7. $(1, 2)$

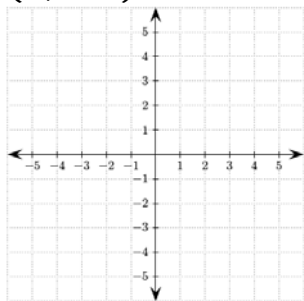


8. $(3, -4)$

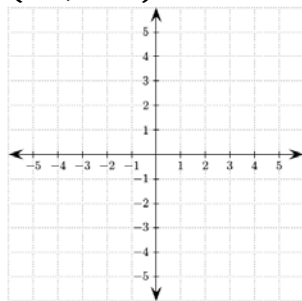


Translate each point.

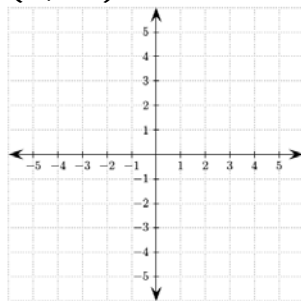
9. $(-5, 0)$ by $(2, -2)$



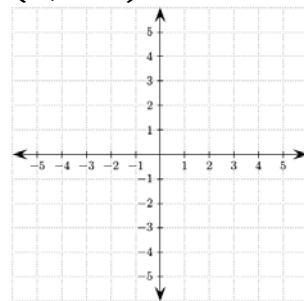
10. $(3, 5)$ by $(-4, -5)$



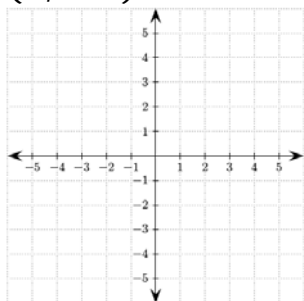
11. $(2, -1)$ by $(1, 0)$



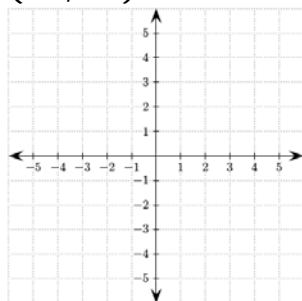
12. $(3, 2)$ by $(2, -2)$



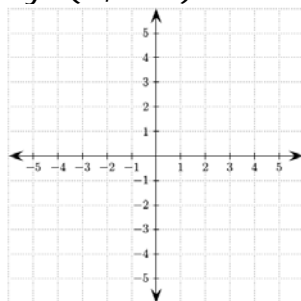
13. $(4, 4)$ by $(1, -2)$



14. $(2, -2)$ by $(-2, 4)$



15. $(-1, -2)$ by $(4, -2)$



16. $(-2, -1)$ by $(4, 4)$

