








Independent Practice 3: Reading Picture Graphs

A survey was done asking people about the type of their favorite type of chocolate. The following data was obtained.

				
Milk chocolate	Dark chocolate	Semi sweet chocolate	Bittersweet chocolate	Unsweetened chocolate
7	2	5	3	4

1	What is the most popular chocolate?	
2	How many people chose milk chocolate as their favorite chocolate?	
3	What is the least popular chocolate?	
4	Did more people choose semi sweet chocolate or bittersweet chocolate?	
5	How many people did not choose dark chocolate as their favorite chocolate?	
6	How many people answered the survey?	
7	Did more people choose unsweetened chocolate or milk chocolate?	
8	How many people did not choose bittersweet chocolate as their favorite chocolate?	
9	If 4 more people chose dark chocolate how many total people would have chosen dark chocolate?	
10	Make a picture graph for the above data to show the result. Mark 'X' for each person's vote	

 Milk chocolate							
 Dark chocolate							
 Semi sweet chocolate							
 Bittersweet chocolate							
 Unsweetened chocolate							