





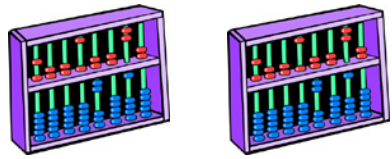



Quiz: Simple Picture Multiplication

<p>1</p>   <p>Each girl wants to reach each scissors. Draw a line from each girl to each scissors. How many lines did you draw?</p>	<p>2</p>   <p>Each girl wants to reach each set of colors. Draw a line from each girl to each set of colors. How many lines did you draw?</p>
<p>3</p>   <p>Each man wants to reach each ice cream cup. Draw a line from each man to each cup. How many lines did you draw?</p>	<p>4</p>   <p>The boy wants to reach each abacus. Draw a line from boy to each abacus. How many lines did you draw?</p>

$$\begin{array}{r} 5 \\ \quad 9 \\ \times \quad 2 \\ \hline \end{array}$$

$$\begin{array}{r} 6 \\ \quad 9 \\ \times \quad 7 \\ \hline \end{array}$$

$$\begin{array}{r} 7 \\ \quad 5 \\ \times \quad 4 \\ \hline \end{array}$$

$$\begin{array}{r} 8 \\ \quad 5 \\ \times \quad 5 \\ \hline \end{array}$$

$$\begin{array}{r} 9 \\ \quad 6 \\ \times \quad 9 \\ \hline \end{array}$$

$$\begin{array}{r} 10 \\ \quad 9 \\ \times \quad 1 \\ \hline \end{array}$$

Circle # Correct	0	1	2	3	4	5	6	7	8	9	10
Percentage Score	0%	10%	20%	30%	40%	50%	60%	70%	80%	90%	100%