

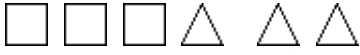





Quiz: Rewriting Ratios

Directions: Write the following ratios.

1.  Circles to triangles	2.  Squares to all figures
3.  Squares to triangles	4.  Triangles to squares
5.  Squares to all figures	6.  Circles to squares
7. 7 yellow marbles and 31 black marbles Ratio of black marbles to red marbles	8. 8 violet marbles and 16 pink marbles Ratio of violet marbles to pink marbles
9. 14 blue marbles and 15 orange marbles Ratio of orange marbles to blue marbles	10. 10 red marbles and 40 black marbles Ratio of black marbles to red marbles

Circle # Correct	0	1	2	3	4	5	6	7	8	9	10
Percentage Score	0%	10%	20%	30%	40%	50%	60%	70%	80%	90%	100%