



Name \_\_\_\_\_ Date \_\_\_\_\_

## Introduction: Identify and Compare Three-dimensional Shapes



### Basic Skills

	<p>Identify the shape?</p> <p>The name of the shape is cube.</p> <p><b>Answer: Rectangle</b></p>
---	--

### Basic Skills Practice

	<p>Identify the shape?</p> <p>The name of the shape is Polyhedra.</p> <p><b>Answer: Polyhedra</b></p>
---	---

### Practice Problems: Identify the following shapes.

A		Identify the shape. _____
B		Identify the shape. _____