









Introduction: Which Shape Doesn't Belong?





Basic Skills

				<p>Which Shape doesn't belong?</p> <p>Solution: Shape A, B and D has 5 sides. Shape C has 6 sides.</p> <p>Answer: C</p>
---	---	---	---	---

Basic Skills Practice

				<p>Which Shape doesn't belong?</p> <p>Solution: Shape A, C and D has 4 sides. Shape B has no sides.</p> <p>Answer: B</p>
---	---	---	---	--

Basic Practice Problems

	A	B	C	D		A	B	C	D
A					B	