

Introduction: Telling Time

When using an analog clock (one with hands) remember that the short hand represents the hours and the long hand represents the minutes.

Intermediate Skills

Draw the clock hands.



11:05

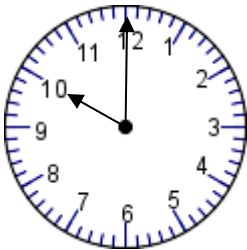


____: ____

Intermediate Skills Practice

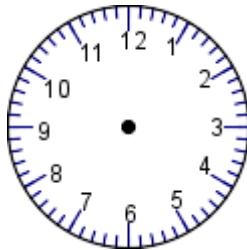
Draw the clock hands.

1.



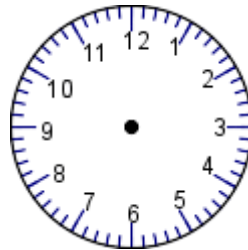
ten o'clock

2.



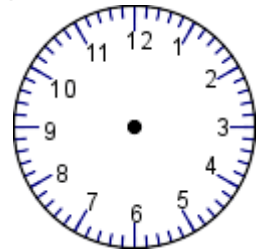
9:45

3.



three-thirty

4.

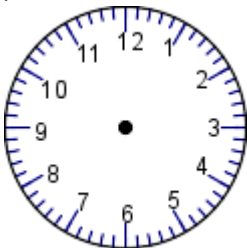


1:35

Practice Problems

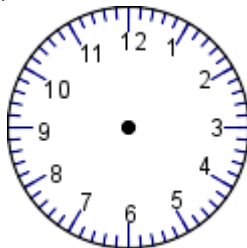
Draw the clock hands.

1.



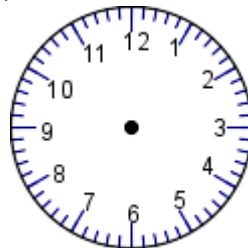
10:15

2.



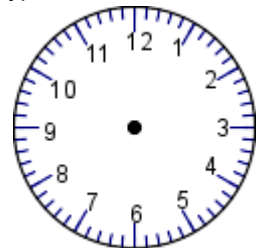
10:00

3.



9:45

4.



9:30